

0	1	2	3	4
---	---	---	---	---

6	7	8	9	10
---	---	---	---	----

0	1	2	3	4
---	---	---	---	---

6	7	8	9	10
---	---	---	---	----

0	1	2	3	4
---	---	---	---	---

6	7	8	9	10
---	---	---	---	----

5

5

5

miMontessori
y nuevas formas de aprender

Restas sencillas con donuts

6 - 4 =

mimontessori
y nuestra forma de compartir

6 - 4 =

mimontessori
y nuestra forma de compartir

4 - 1 =

mimontessori
y nuestra forma de compartir

9 - 2 =

mimontessori
y nuestra forma de compartir

A subtraction problem using pink donuts. The first box (blue border) contains 5 donuts. The second box (green border) contains 4 donuts. Below them is an equation: a blue-bordered empty box, followed by a minus sign, a green-bordered empty box, followed by an equals sign, and a red-bordered empty box.

mimontessori
y nuestra forma de compartir

A subtraction problem using chocolate donuts. The first box (blue border) contains 5 donuts. The second box (green border) contains 2 donuts. Below them is an equation: a blue-bordered empty box, followed by a minus sign, a green-bordered empty box, followed by an equals sign, and a red-bordered empty box.

mimontessori
y nuestra forma de compartir

A subtraction problem with mixed donuts. The first box (blue border) contains 9 donuts: 3 pink, 3 chocolate, and 3 yellow. The second box (green border) contains 2 pink donuts. Below them is an equation: a blue-bordered empty box, followed by a minus sign, a green-bordered empty box, followed by an equals sign, and a red-bordered empty box.

mimontessori
y nuestra forma de compartir

A subtraction problem with mixed donuts. The first box (blue border) contains 9 donuts: 3 pink, 3 chocolate, and 3 yellow. The second box (green border) contains 1 yellow donut. Below them is an equation: a blue-bordered empty box, followed by a minus sign, a green-bordered empty box, followed by an equals sign, and a red-bordered empty box.

mimontessori
y nuestra forma de compartir

A subtraction problem using donuts. The first box (blue border) contains 4 donuts. The second box (green border) contains 2 donuts. Below the boxes is an equation: a blue square followed by a minus sign, a green square, an equals sign, and a red square.

mimontessori
y nuestra forma de compartirlo

A subtraction problem using donuts. The first box (blue border) contains 6 donuts. The second box (green border) contains 4 donuts. Below the boxes is an equation: a blue square followed by a minus sign, a green square, an equals sign, and a red square.

mimontessori
y nuestra forma de compartirlo

A subtraction problem using donuts. The first box (blue border) contains 2 donuts. The second box (green border) is empty. Below the boxes is an equation: a blue square followed by a minus sign, a green square, an equals sign, and a red square.

mimontessori
y nuestra forma de compartirlo

A subtraction problem using donuts. The first box (blue border) contains 5 donuts. The second box (green border) contains 1 donut. Below the boxes is an equation: a blue square followed by a minus sign, a green square, an equals sign, and a red square.

mimontessori
y nuestra forma de compartirlo

4 pink donuts - 2 pink donuts =

mimontessori
y nuestra forma de compartir

7 donuts (3 yellow, 2 pink, 2 brown) - 4 donuts (2 yellow, 2 brown) =




mimontessori
y nuestra forma de compartir

10 donuts (3 yellow, 3 pink, 4 brown) - 4 donuts (2 pink, 2 yellow) =


mimontessori
y nuestra forma de compartir

10 donuts (3 yellow, 3 pink, 4 brown) - 5 donuts (2 yellow, 2 brown, 1 pink) =

mimontessori
y nuestra forma de compartir



-



=

